






## Tangram Polygons






Use your 7 tangram puzzle pieces to discover which shapes in the table below can be recreated. The number on the left indicates how many pieces to use for each shape. Write 'yes' in the column if the shape can be made. Write 'no' if the shape cannot be made.

					
1					
2					
3					
4					
5					
6					
7					

Gellin' with Geometry Family Math Night © 2014 Math Unity

## Tangram Polygons

Use your 7 tangram puzzle pieces to discover which shapes in the table below can be recreated. The number on the left indicates how many pieces to use for each shape. Write 'yes' in the column if the shape can be made. Write 'no' if the shape cannot be made.

					
1					
2					
3					
4					
5					
6					
7					

Gellin' with Geometry Family Math Night © 2014 Math Unity